

Metric Exercise #2

Linear Measurement

©1993 Sci-Ed Services

Name _____ Date _____ Hour _____

Measure the following line segments and write the length in the box to the right of the line.
ANSWERS MUST BE TO THE NEAREST mm! (1/10 cm or 0.1cm)

- _____
- _____
- _____
- _____
- _____

cm

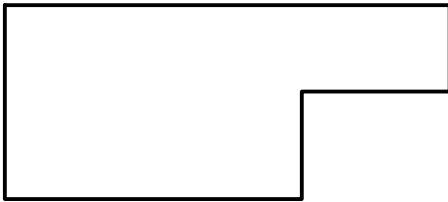
mm

dm


mm

cm

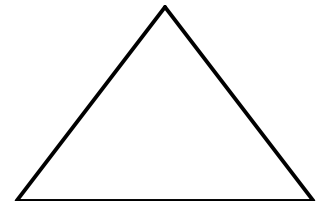
Measure the **perimeter** of the following figures and write the answer on the line below each.



6. _____ cm


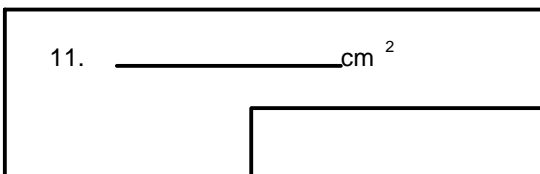
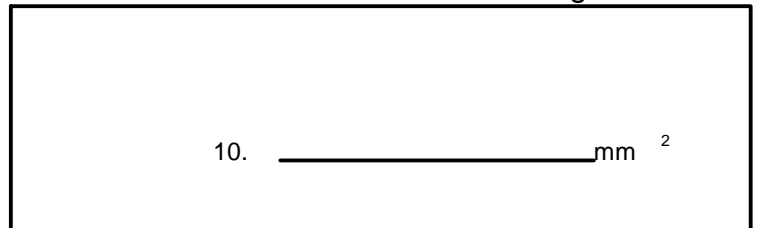


7. _____ mm



8. _____ cm

Calculate the **area** of the following figures and write the area on the lines inside each figure.



3.2 cm

8.9 cm